



# Worksheet 4

Time  
Length



1 Draw a line to match each clock to the correct time.



half past 10



four o'clock

half past eleven



one o'clock

2 All these times are during the day. Tick the clock that shows the **later** time.

a



b



3 How long is each toothbrush?

a



paper clips long

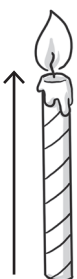
b



paper clips long

4 Tick the unit you will use to measure these objects.

a



hand spans

paper clips

b



hand spans

paper clips